

**RD SHARMA**

**Solutions**

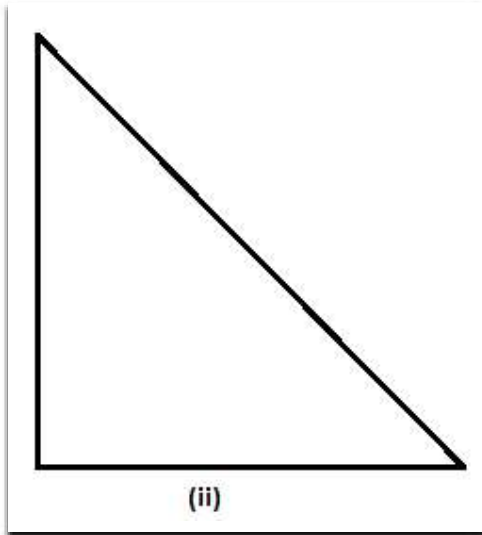
**Class 6 Maths**

**Chapter 20**

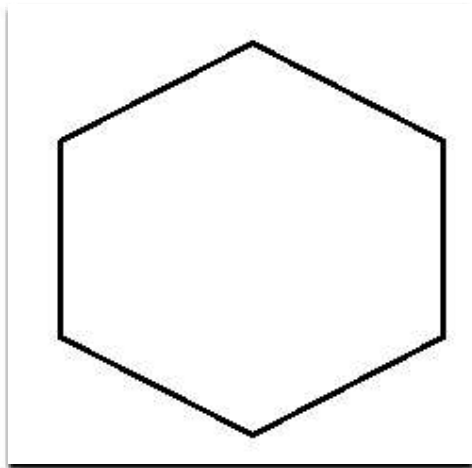
**Ex 20.1**

Question 1. Which of the following are closed curves? Which of them are simple?

(i)




(ii)

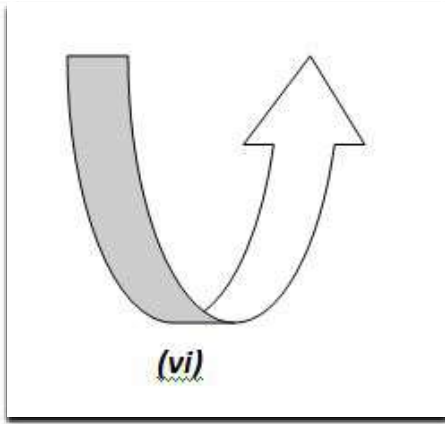


(iii)

(iv)



(v)



**Answer:**

Figure (ii), (iii), (iv), (vi), and (vii) are closed curves, whereas Figure (i), (iii), (iv) and (vi) are simple closed curves.

**Question 2. Define perimeter of a closed figure.**

**Answer:**

The length of the boundary of a closed figure is known as its perimeter.

**Question 3. Find the perimeter of each of the following shapes:**

