

RD SHARMA

Solutions

Class 6 Maths

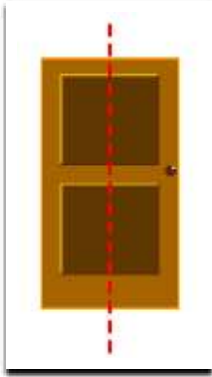
Chapter 17

Ex 17.1


1. List any four symmetrical objects from your home or school. Also mention the line of symmetry.

Soln:

i. A gate –



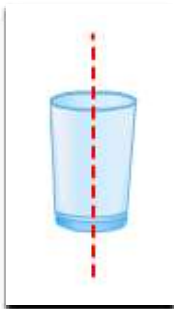
ii. A green board –



iii. A pair of spectacles –



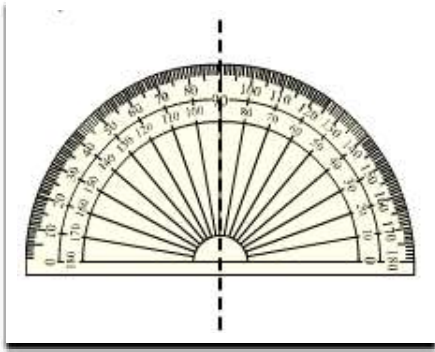
iv. A glass



2. Identify the symmetrical instruments from your mathematical instrument box.

Soln:


i. A protractor



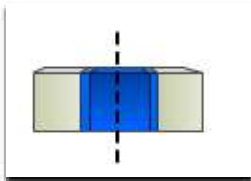
ii. A divider



iii. A ruler (scale)



iv. A eraser

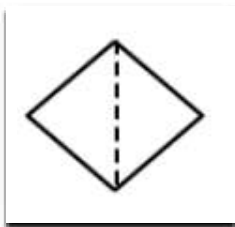


v. A pencil

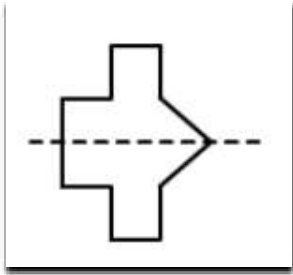


3. Copy each of the following on a squared paper and complete them in such a way that the dotted line is the line of symmetry.

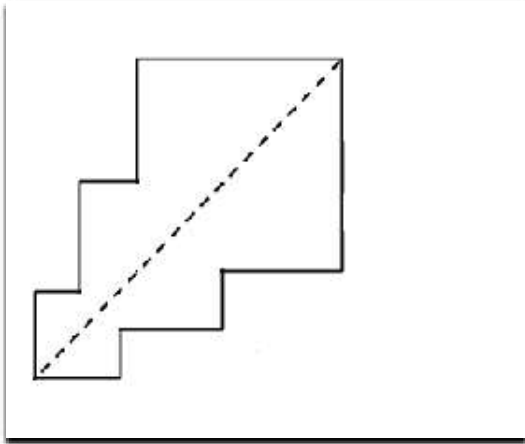
i.



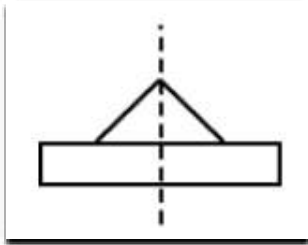
ii.



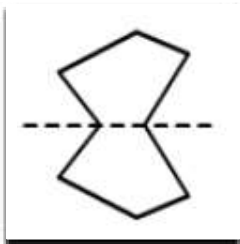
iii.



iv.



v.



vi.

